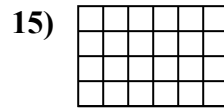

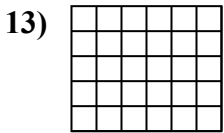
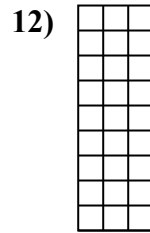
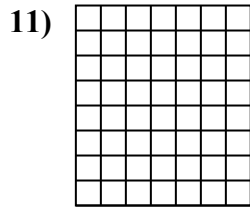
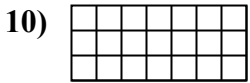
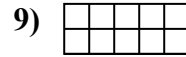
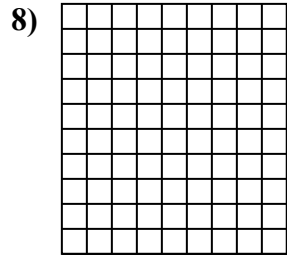
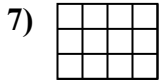
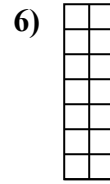
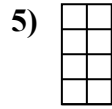
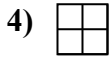
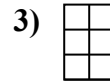
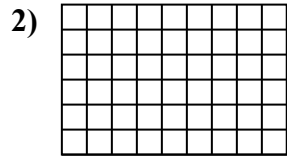
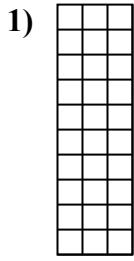




Determine the area. Each $\square = 1$ square unit (u^2).



Answers

1. _____

2. _____

3. _____

4. _____

5. _____

6. _____

7. _____

8. _____

9. _____

10. _____

11. _____

12. _____

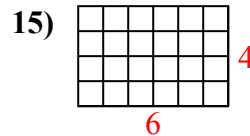
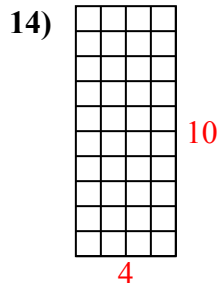
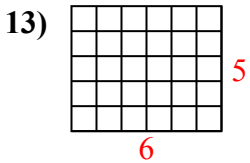
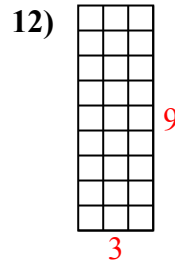
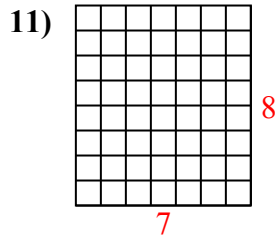
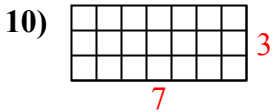
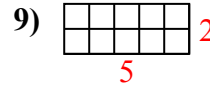
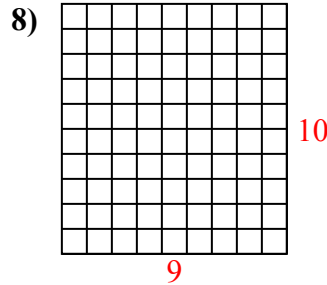
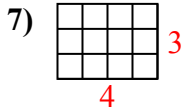
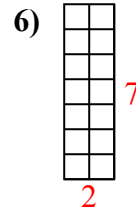
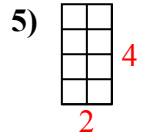
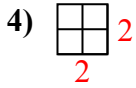
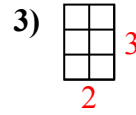
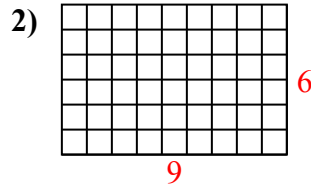
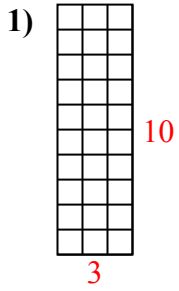
13. _____

14. _____

15. _____



Determine the area. Each $\square = 1$ square unit (u^2).



Answers

1. 30 u^2

2. 54 u^2

3. 6 u^2

4. 4 u^2

5. 8 u^2

6. 14 u^2

7. 12 u^2

8. 90 u^2

9. 10 u^2

10. 21 u^2

11. 56 u^2

12. 27 u^2

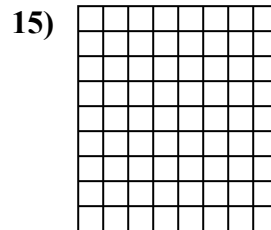
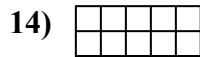
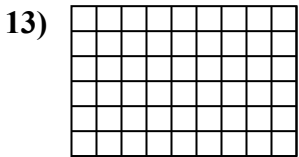
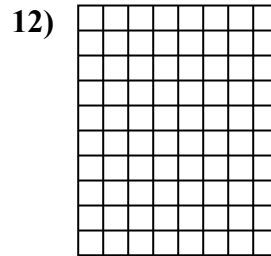
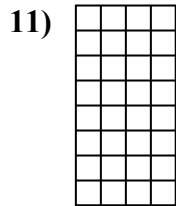
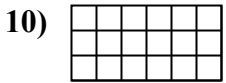
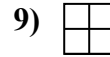
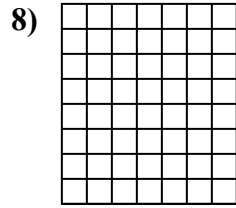
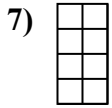
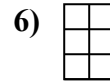
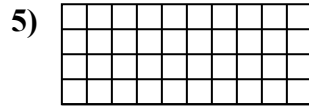
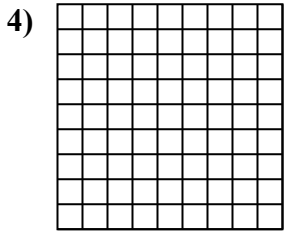
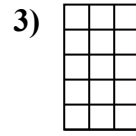
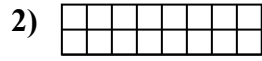
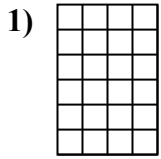
13. 30 u^2

14. 40 u^2

15. 24 u^2



Determine the area. Each $\square = 1$ square unit (u^2).



Answers

1. _____

2. _____

3. _____

4. _____

5. _____

6. _____

7. _____

8. _____

9. _____

10. _____

11. _____

12. _____

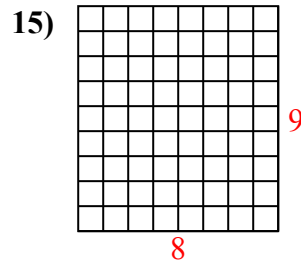
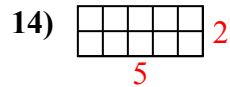
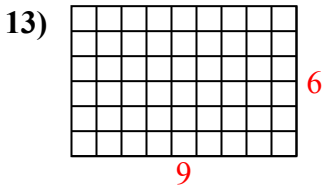
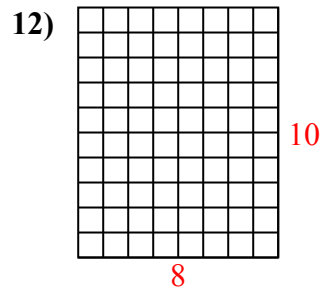
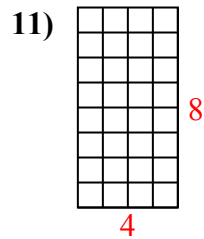
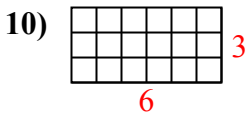
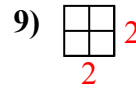
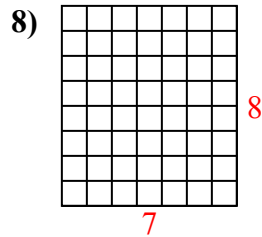
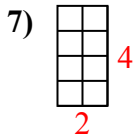
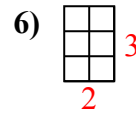
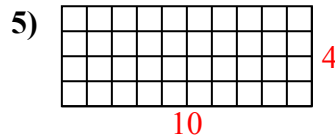
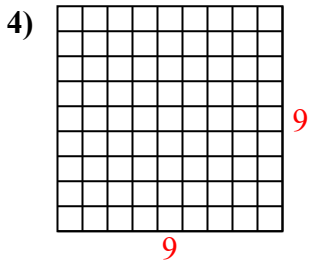
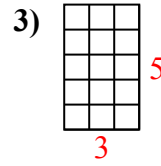
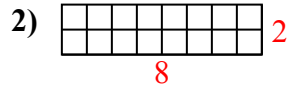
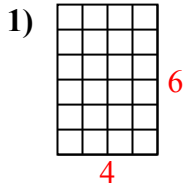
13. _____

14. _____

15. _____



Determine the area. Each $\square = 1$ square unit (u^2).



Answers

1. 24 u^2

2. 16 u^2

3. 15 u^2

4. 81 u^2

5. 40 u^2

6. 6 u^2

7. 8 u^2

8. 56 u^2

9. 4 u^2

10. 18 u^2

11. 32 u^2

12. 80 u^2

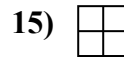
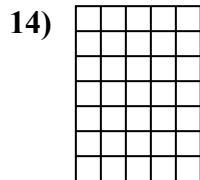
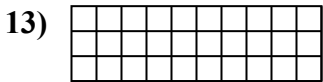
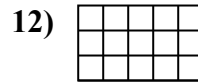
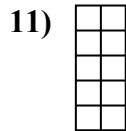
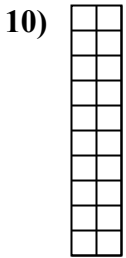
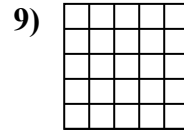
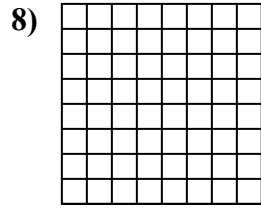
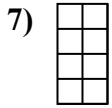
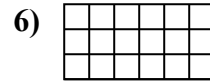
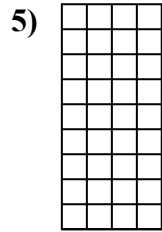
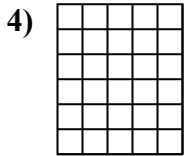
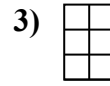
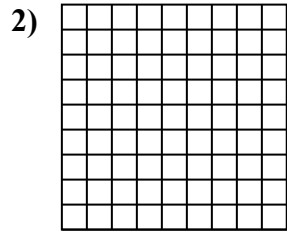
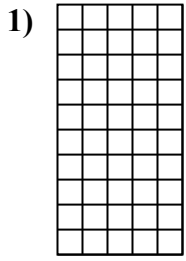
13. 54 u^2

14. 10 u^2

15. 72 u^2



Determine the area. Each $\square = 1$ square unit (u^2).



Answers

1. _____

2. _____

3. _____

4. _____

5. _____

6. _____

7. _____

8. _____

9. _____

10. _____

11. _____

12. _____

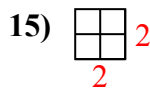
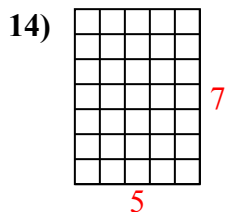
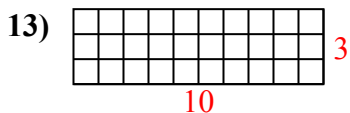
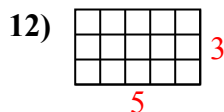
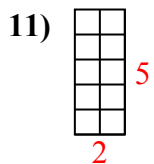
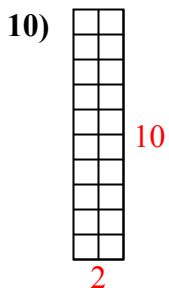
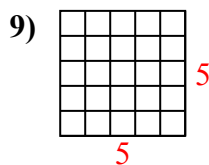
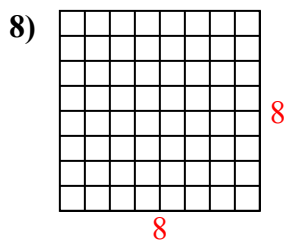
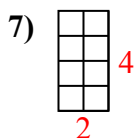
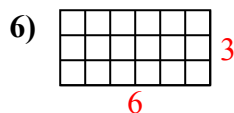
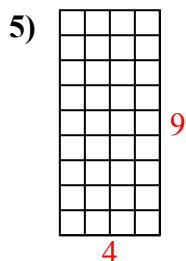
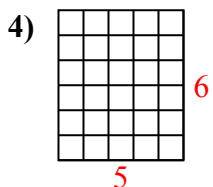
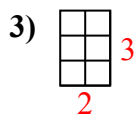
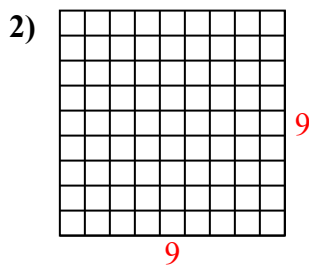
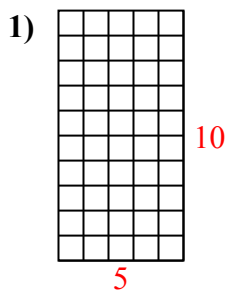
13. _____

14. _____

15. _____



Determine the area. Each $\square = 1$ square unit (u^2).



Answers

1. 50 u^2

2. 81 u^2

3. 6 u^2

4. 30 u^2

5. 36 u^2

6. 18 u^2

7. 8 u^2

8. 64 u^2

9. 25 u^2

10. 20 u^2

11. 10 u^2

12. 15 u^2

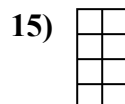
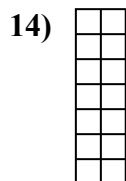


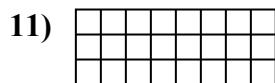
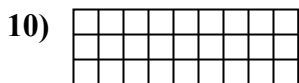
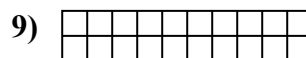

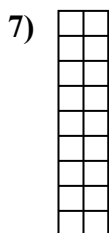
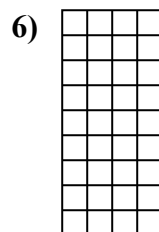
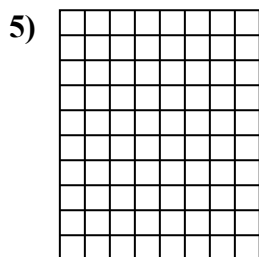
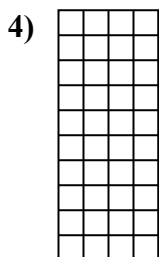
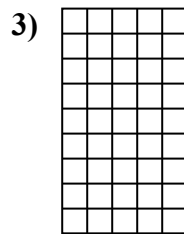
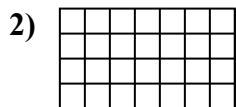
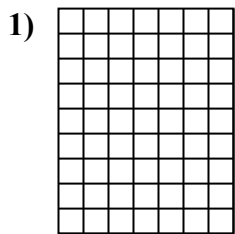
13. 30 u^2

14. 35 u^2

15. 4 u^2



Determine the area. Each $\square = 1$ square unit (u^2).

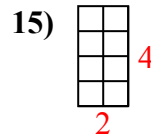
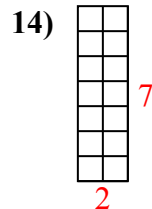
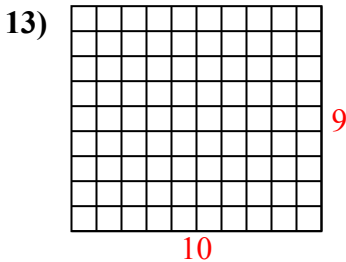
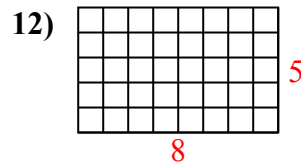
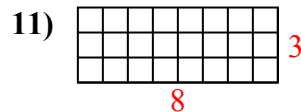
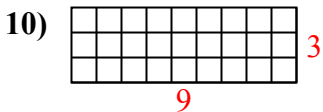
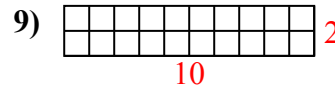
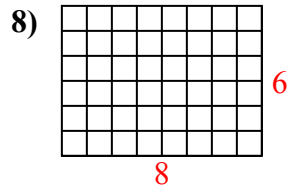
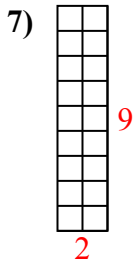
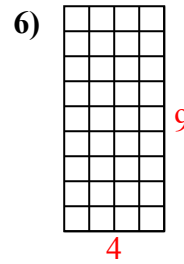
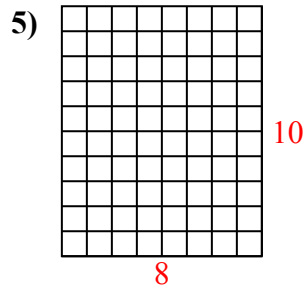
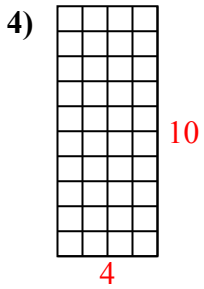
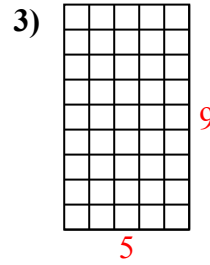
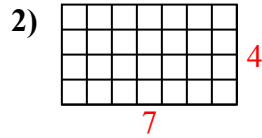
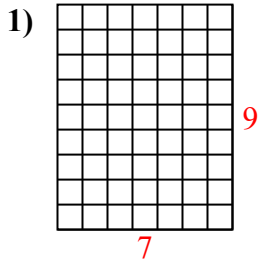


Answers

1. _____
2. _____
3. _____
4. _____
5. _____
6. _____
7. _____
8. _____
9. _____
10. _____
11. _____
12. _____
13. _____
14. _____
15. _____



Determine the area. Each $\square = 1$ square unit (u^2).



Answers

1. 63 u^2

2. 28 u^2

3. 45 u^2

4. 40 u^2

5. 80 u^2

6. 36 u^2

7. 18 u^2

8. 48 u^2

9. 20 u^2

10. 27 u^2

11. 24 u^2

12. 40 u^2

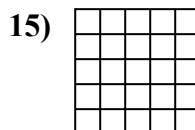
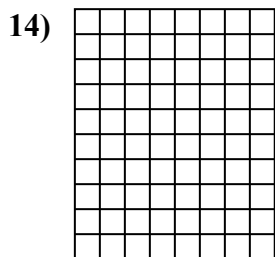
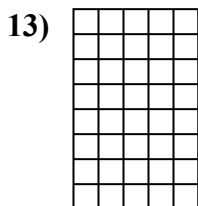
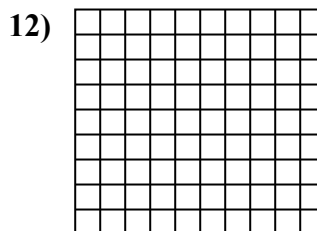

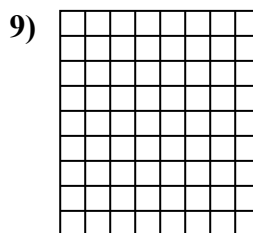
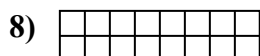
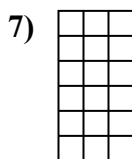
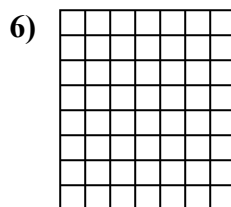
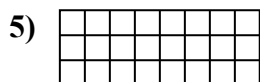
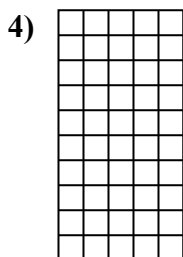
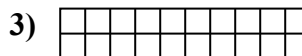
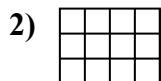

13. 90 u^2

14. 14 u^2

15. 8 u^2



Determine the area. Each $\square = 1$ square unit (u^2).



Answers

1. _____

2. _____

3. _____

4. _____

5. _____

6. _____

7. _____

8. _____

9. _____

10. _____

11. _____

12. _____

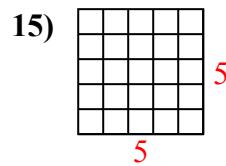
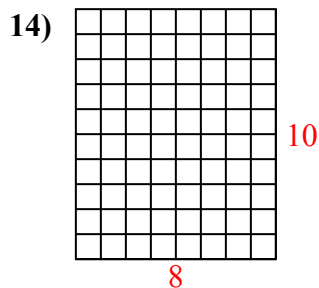
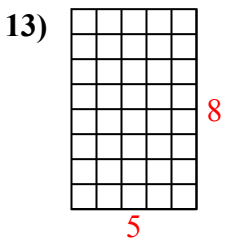
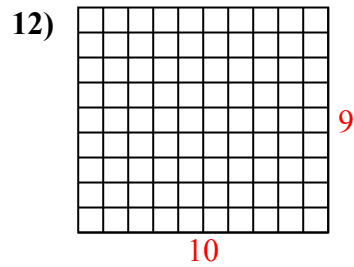
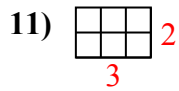
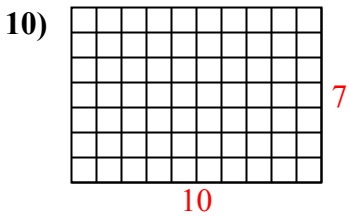
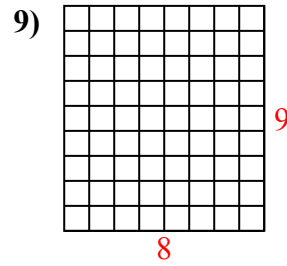
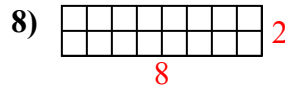
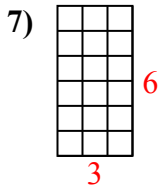
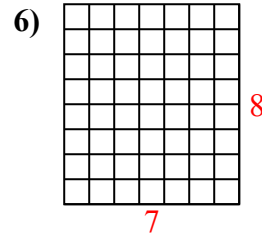
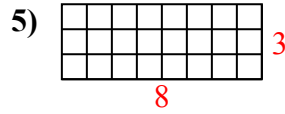
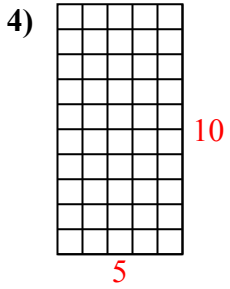
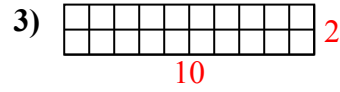
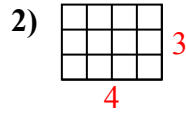
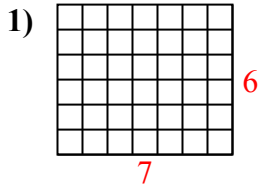
13. _____

14. _____

15. _____



Determine the area. Each $\square = 1$ square unit (u^2).



Answers

1. 42 u^2

2. 12 u^2

3. 20 u^2

4. 50 u^2

5. 24 u^2

6. 56 u^2

7. 18 u^2

8. 16 u^2

9. 72 u^2

10. 70 u^2

11. 6 u^2

12. 90 u^2

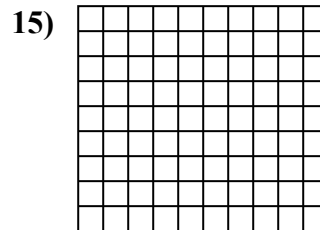
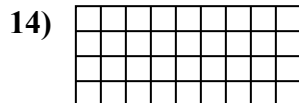
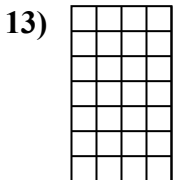
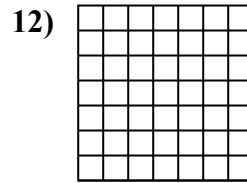
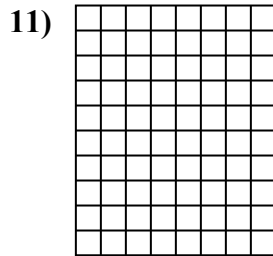
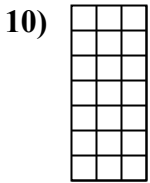
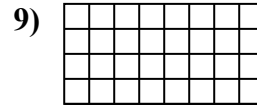
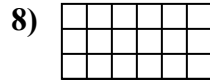
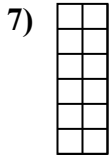
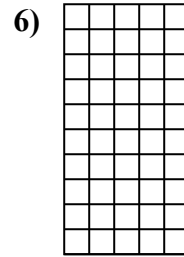
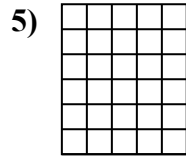
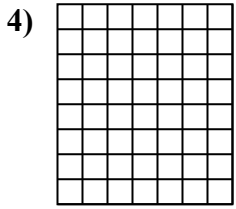
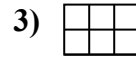
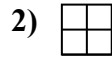
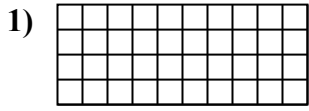
13. 40 u^2

14. 80 u^2

15. 25 u^2



Determine the area. Each $\square = 1$ square unit (u^2).



Answers

1. _____

2. _____

3. _____

4. _____

5. _____

6. _____

7. _____

8. _____

9. _____

10. _____

11. _____

12. _____

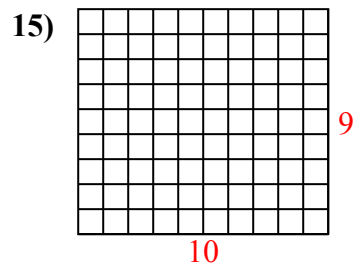
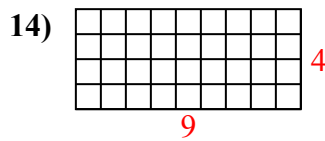
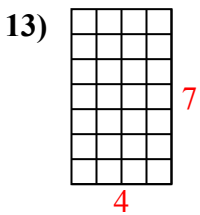
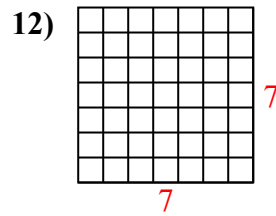
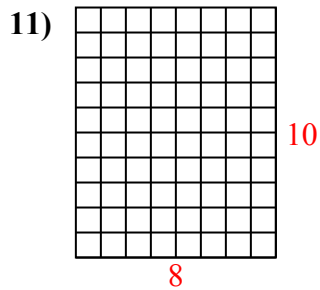
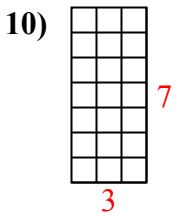
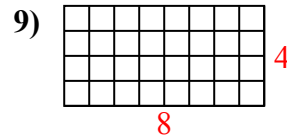
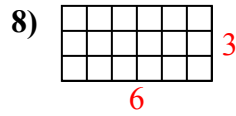
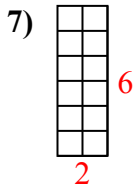
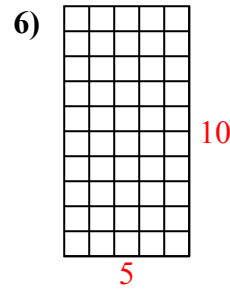
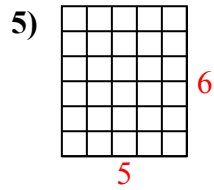
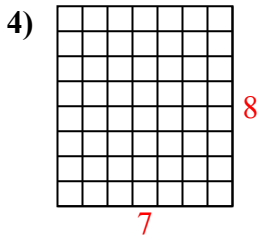
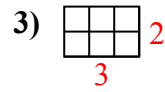
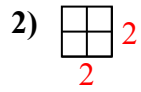
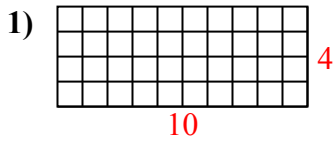
13. _____

14. _____

15. _____



Determine the area. Each $\square = 1$ square unit (u^2).



Answers

1. 40 u^2

2. 4 u^2

3. 6 u^2

4. 56 u^2

5. 30 u^2

6. 50 u^2

7. 12 u^2

8. 18 u^2

9. 32 u^2

10. 21 u^2

11. 80 u^2

12. 49 u^2

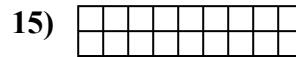
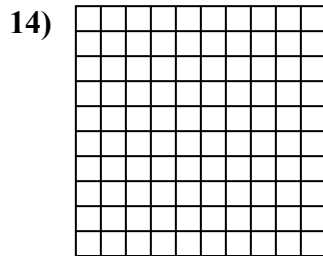
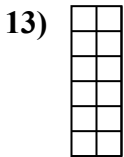
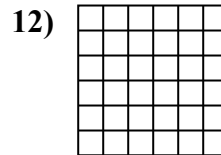
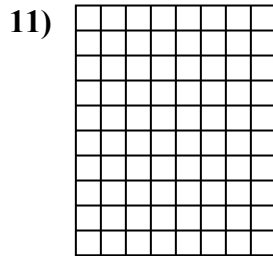
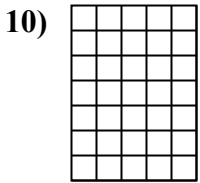
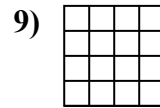
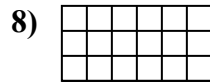
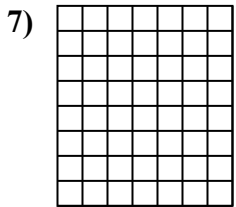
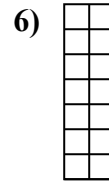
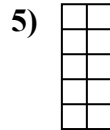
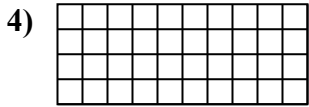

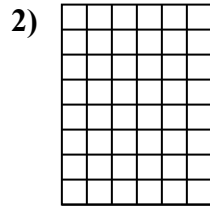
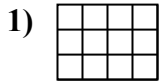
13. 28 u^2

14. 36 u^2

15. 90 u^2



Determine the area. Each $\square = 1$ square unit (u^2).

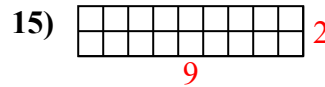
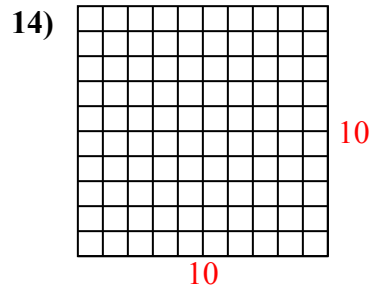
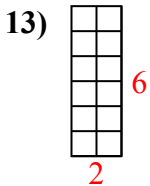
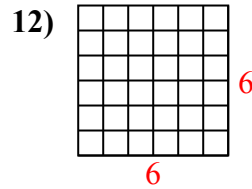
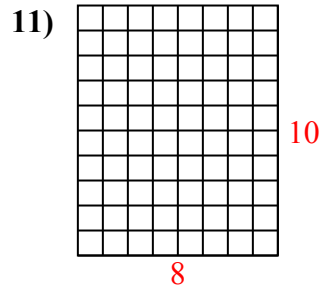
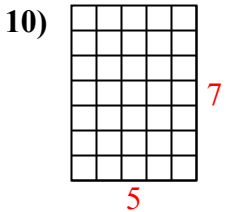
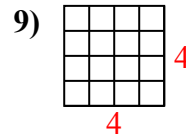
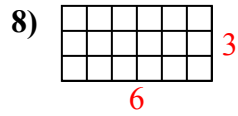
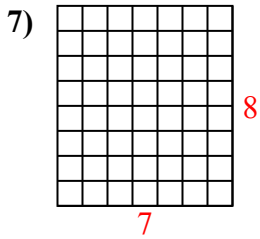
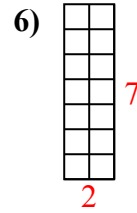
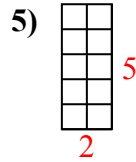
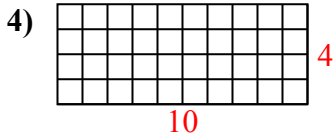
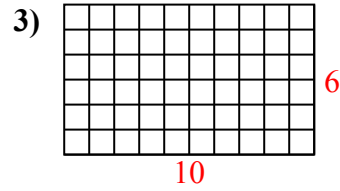
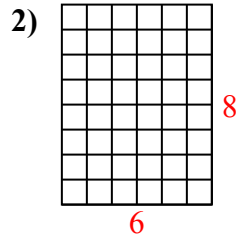
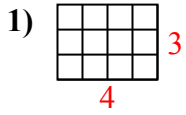


Answers

1. _____
2. _____
3. _____
4. _____
5. _____
6. _____
7. _____
8. _____
9. _____
10. _____
11. _____
12. _____
13. _____
14. _____
15. _____



Determine the area. Each $\square = 1$ square unit (u^2).



Answers

1. 12 u^2

2. 48 u^2

3. 60 u^2

4. 40 u^2

5. 10 u^2

6. 14 u^2

7. 56 u^2

8. 18 u^2

9. 16 u^2

10. 35 u^2

11. 80 u^2

12. 36 u^2

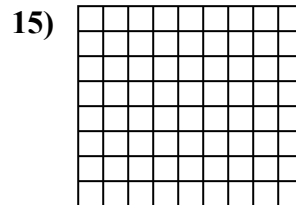

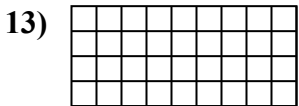
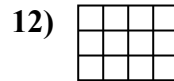
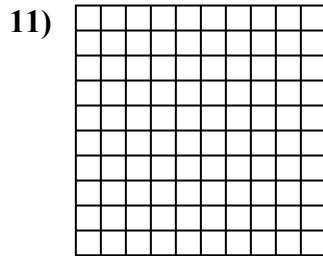
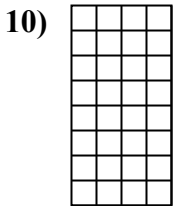
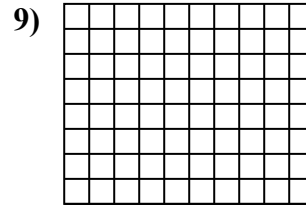
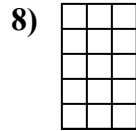
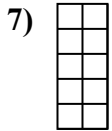
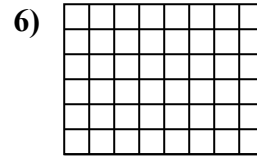
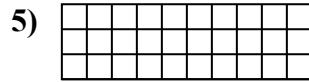
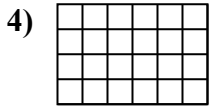
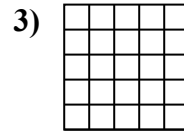
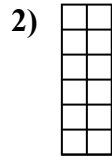
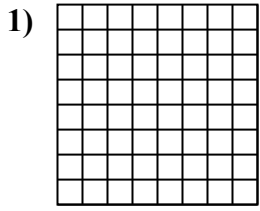
13. 12 u^2

14. 100 u^2

15. 18 u^2



Determine the area. Each $\square = 1$ square unit (u^2).



Answers

1. _____

2. _____

3. _____

4. _____

5. _____

6. _____

7. _____

8. _____

9. _____

10. _____

11. _____

12. _____

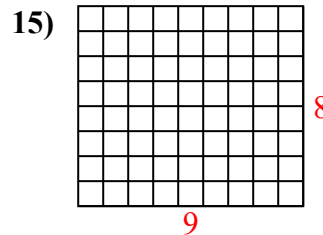
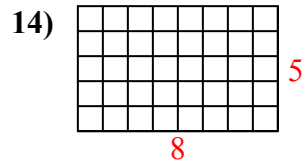
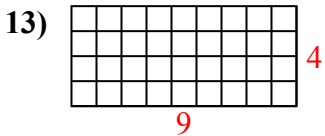
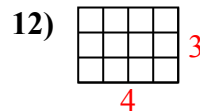
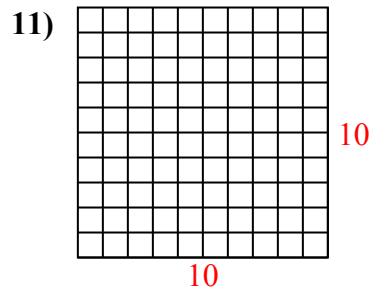
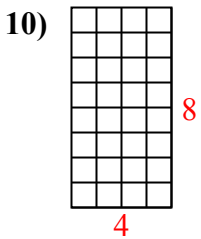
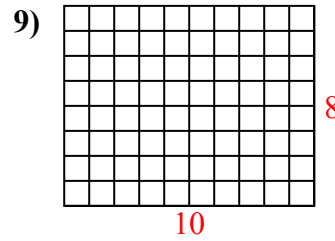
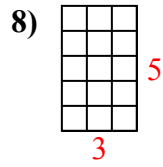
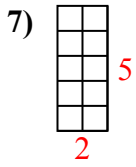
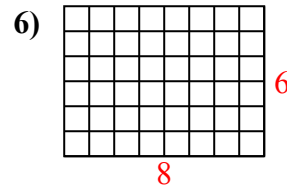
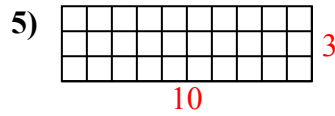
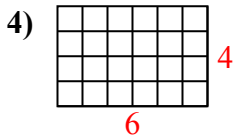
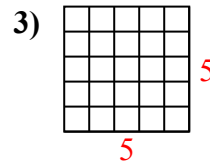
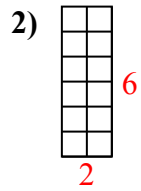
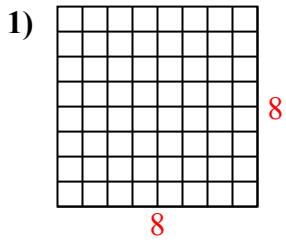
13. _____

14. _____

15. _____



Determine the area. Each $\square = 1$ square unit (u^2).



Answers

1. 64 u^2

2. 12 u^2

3. 25 u^2

4. 24 u^2

5. 30 u^2

6. 48 u^2

7. 10 u^2

8. 15 u^2

9. 80 u^2

10. 32 u^2

11. 100 u^2

12. 12 u^2

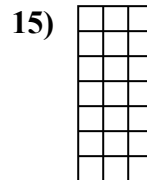
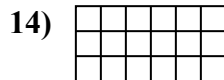
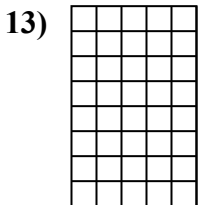
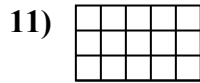

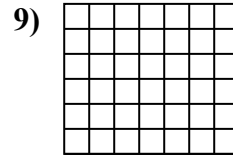
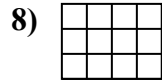
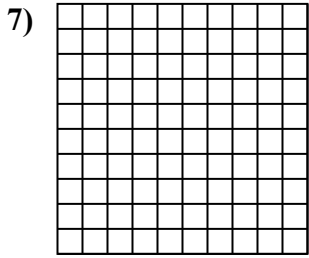
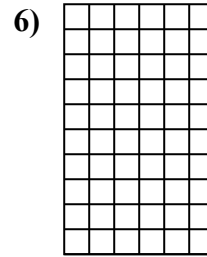
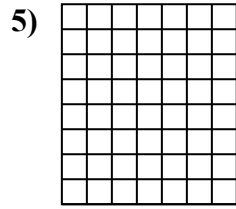
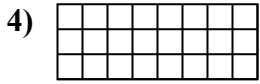

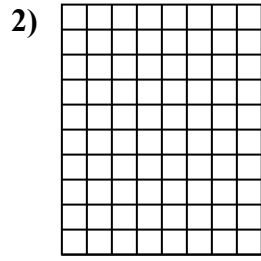
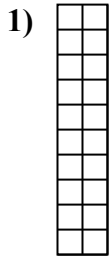
13. 36 u^2

14. 40 u^2

15. 72 u^2



Determine the area. Each $\square = 1$ square unit (u^2).

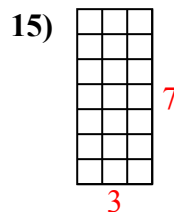
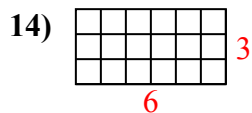
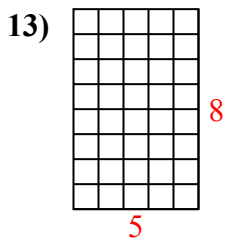
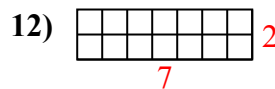
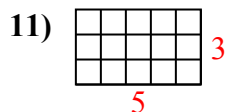
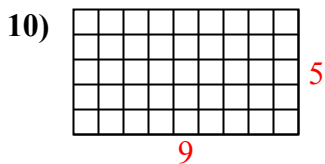
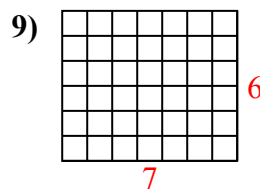
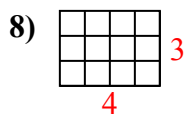
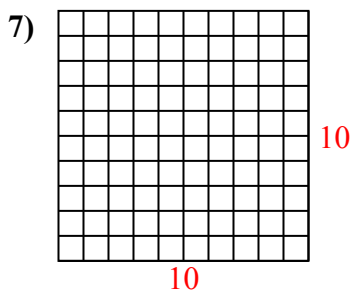
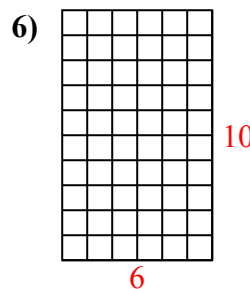
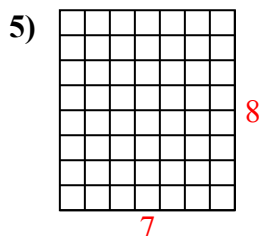
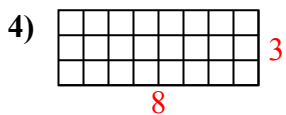
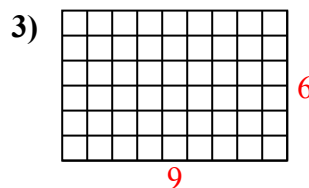
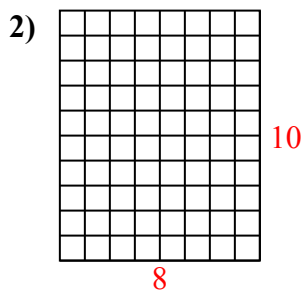
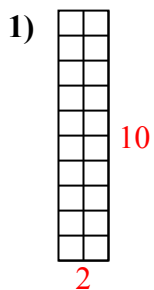


Answers

1. _____
2. _____
3. _____
4. _____
5. _____
6. _____
7. _____
8. _____
9. _____
10. _____
11. _____
12. _____
13. _____
14. _____
15. _____



Determine the area. Each $\square = 1$ square unit (u^2).



Answers

1. 20 u^2

2. 80 u^2

3. 54 u^2

4. 24 u^2

5. 56 u^2

6. 60 u^2

7. 100 u^2

8. 12 u^2

9. 42 u^2

10. 45 u^2

11. 15 u^2

12. 14 u^2

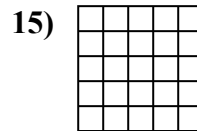
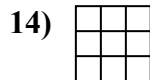
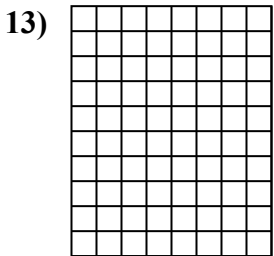
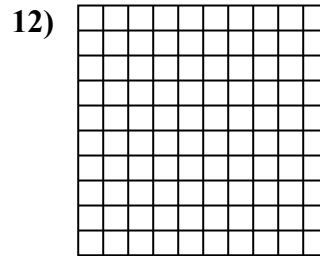
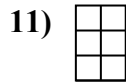
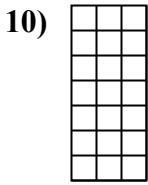
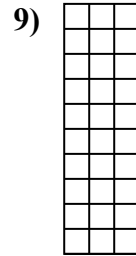

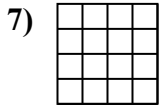
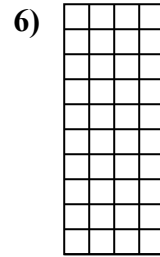
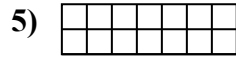
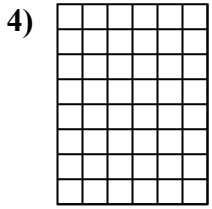
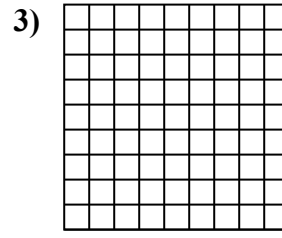
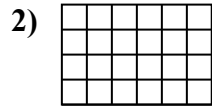
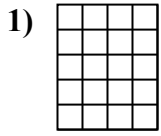
13. 40 u^2

14. 18 u^2

15. 21 u^2



Determine the area. Each $\square = 1$ square unit (u^2).

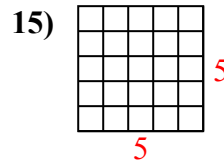
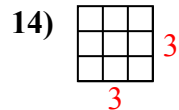
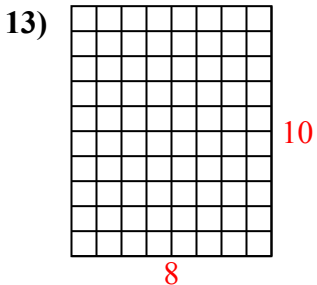
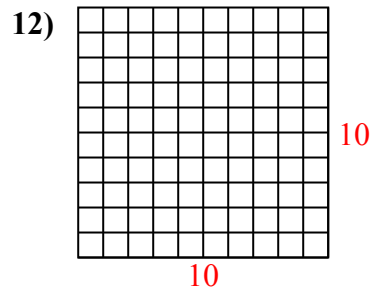
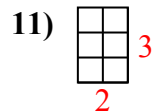
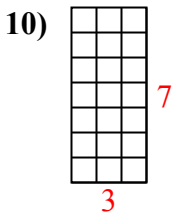
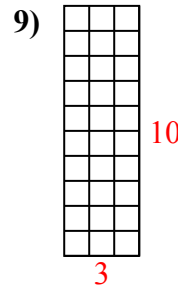
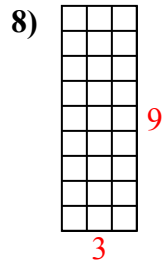
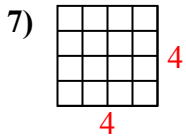
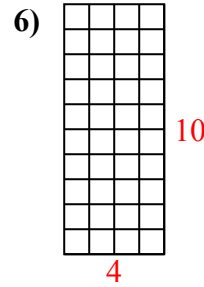
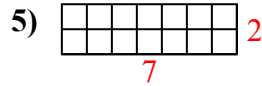
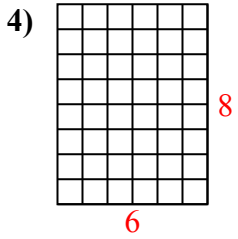
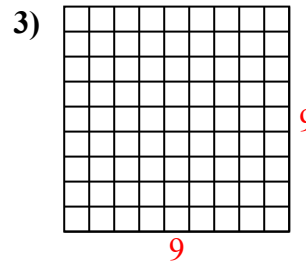
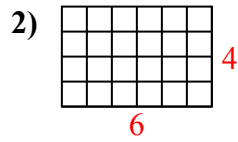
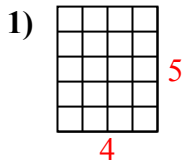


Answers

1. _____
2. _____
3. _____
4. _____
5. _____
6. _____
7. _____
8. _____
9. _____
10. _____
11. _____
12. _____
13. _____
14. _____
15. _____



Determine the area. Each $\square = 1$ square unit (u^2).



Answers

1. 20 u^2

2. 24 u^2

3. 81 u^2

4. 48 u^2

5. 14 u^2

6. 40 u^2

7. 16 u^2

8. 27 u^2

9. 30 u^2

10. 21 u^2

11. 6 u^2

12. 100 u^2

13. 80 u^2

14. 9 u^2

15. 25 u^2